

數學科 三年級 自學工作紙(一)

姓名：_____ ()

日期：_____

班別：_____年級_____班

成績：_____

算算看。

1. $3 \times 3 = \boxed{9}$

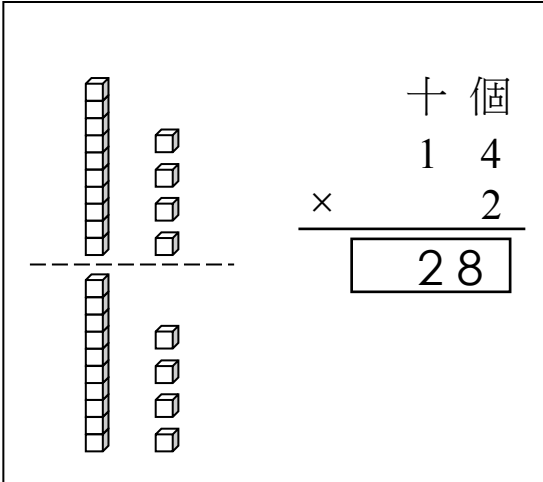
2. $5 \times 2 = \boxed{10}$

3. $7 \times 4 = \boxed{28}$

$30 \times 3 = \boxed{90}$

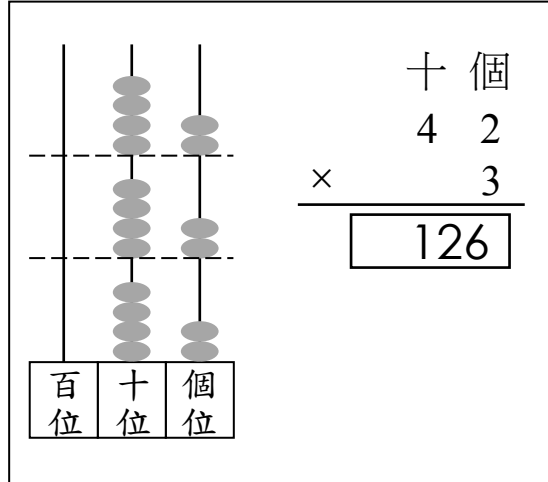
$50 \times 2 = \boxed{100}$

$70 \times 4 = \boxed{280}$

4. 

 The diagram shows two tens rods and four ones units representing 14. Below a dashed line, there are two more tens rods and eight ones units representing 28. To the right, a vertical multiplication diagram shows:

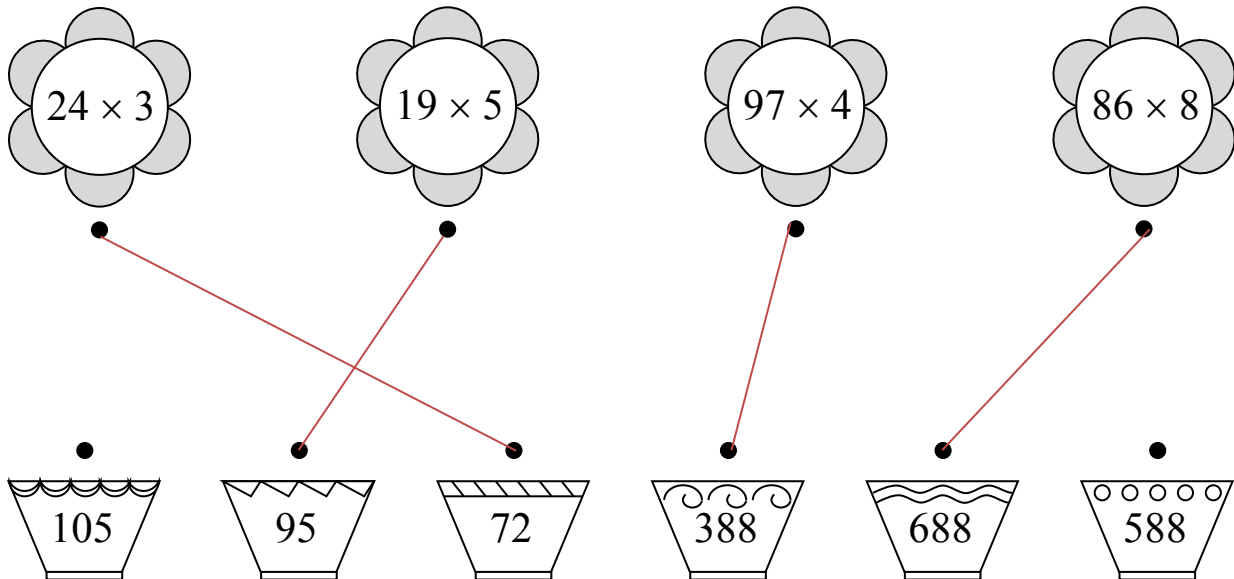
$$\begin{array}{r} \text{十 個} \\ 14 \\ \times \quad 2 \\ \hline \boxed{28} \end{array}$$

5. 

 The abacus shows 42 on the ten and one rods. Multiplying by 3 results in 126, with one bead moved to the hundred rod. To the right, a vertical multiplication diagram shows:

$$\begin{array}{r} \text{十 個} \\ 42 \\ \times \quad 3 \\ \hline \boxed{126} \end{array}$$

連連看。

6. 

 Four flowers contain multiplication problems: 24×3 , 19×5 , 97×4 , and 86×8 . Three baskets contain products: 105, 95, 72, 388, 688, and 588. Red lines connect the flowers to their correct products: 24×3 to 72, 19×5 to 95, and 97×4 to 388.

購物樂

列式回答下列各題。

7. 媽媽手裏正拿着以下的貨幣。



$$\boxed{10} \times \boxed{4} = \boxed{40}$$

媽媽手裏拿着的貨幣總值是 40元。

8.



$$12 \times 2 = 24$$

買兩杯雪糕共需付 24元。

9. 三人合資購買一個生日蛋糕，每人付款 79 元，蛋糕的售價是多少元？

$$\begin{aligned} &79 \times 3 \\ &= 237 \\ &\text{蛋糕的售價是 } 237 \text{ 元。} \end{aligned}$$

