

數學科一年級自學工作紙(三)

姓名： _____ ()

日期： _____

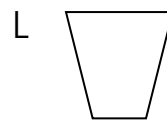
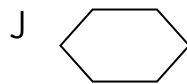
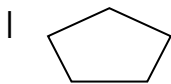
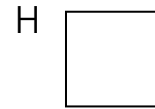
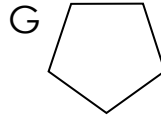
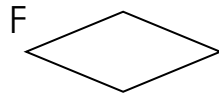
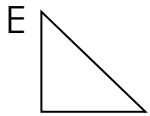
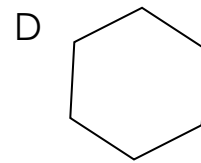
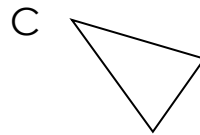

班別： 一年級 _____ 班

成績： _____

第一習階段數學科教育電視節目《尋尋覓覓—平面圖形(一)》

<https://www.hkedcity.net/etv/resource/2091062112>

1. 選擇正確的平面圖形，將英文字母填寫在橫線上。



a. 三角形: C, E

b. 四邊形: B, F, H, L

c. 正方形: H

d. 長方形: B

e. 五邊形: G, I

f. 六邊形: D, J

g. 圓形: A